

Weather Forecasting /Prompt # 1



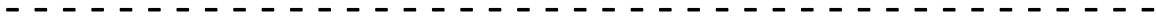
On Monday, I predict the weather will be _____ and _____.
On Tuesday, I predict the weather will be _____ and _____.
On Wednesday, I predict the weather will be _____ and _____.
On Thursday, I predict the weather will be _____ and _____.
On Friday, I predict the weather will be _____ and _____.



Weather Forecasting /Prompt # 1



On Monday, I predict the weather will be _____ and _____.
On Tuesday, I predict the weather will be _____ and _____.
On Wednesday, I predict the weather will be _____ and _____.
On Thursday, I predict the weather will be _____ and _____.
On Friday, I predict the weather will be _____ and _____.



Weather Forecasting/Prompt # 1



On Monday, I predict the weather will be _____ and _____.
On Tuesday, I predict the weather will be _____ and _____.
On Wednesday, I predict the weather will be _____ and _____.
On Thursday, I predict the weather will be _____ and _____.
On Friday, I predict the weather will be _____ and _____.



Weather Forecasting /Prompt # 1



On Monday, I predict the weather will be _____ and _____.
On Tuesday, I predict the weather will be _____ and _____.
On Wednesday, I predict the weather will be _____ and _____.
On Thursday, I predict the weather will be _____ and _____.
On Friday, I predict the weather will be _____ and _____.



Weather Forecasting /Prompt # 2




The writing today will be a Fact Chart.
Divide paper into four parts. Pick one weather type
(Tornadoes, Hurricanes, Blizzards, or Thunderstorms) and write
one fact for it in each box and illustrate.

Weather Forecasting /Prompt # 2



The writing today will be a Fact Chart.
Divide paper into four parts. Pick one weather type
(Tornadoes, Hurricanes, Blizzards, or Thunderstorms) and write one
fact for it in each box and illustrate.

Weather Forecasting /Prompt # 2



The writing today will be a Fact Chart.
Divide paper into four parts. Pick one weather type
(Tornadoes, Hurricanes, Blizzards, or Thunderstorms) and write one
fact for it in each box and illustrate.

Weather Forecasting /Prompt # 2



The writing today will be a Fact Chart.
Divide paper into four parts. Pick one weather type
(Tornadoes, Hurricanes, Blizzards, or Thunderstorms) and write one
fact for it in each box and illustrate.

Weather Forecasting /Prompt # 3



Pick a season and write a weather report:

The season is _____.

It will be _____ (sunny, rainy, snowy, cloudy) and the temperature will be _____ (warm, hot, cool, or cold.)

Weather Forecasting /Prompt # 3




Pick a season and write a weather report:

The season is _____.

It will be _____ (sunny, rainy, snowy, cloudy) and the temperature will be _____ (warm, hot, cool, or cold.)

Weather Forecasting /Prompt # 3



Pick a season and write a weather report:

The season is _____.

It will be _____ (sunny, rainy, snowy, cloudy) and the temperature will be _____ (warm, hot, cool, or cold.)

Weather Forecasting /Prompt # 3



Pick a season and write a weather report:

The season is _____.

It will be _____ (sunny, rainy, snowy, cloudy) and the temperature will be _____ (warm, hot, cool, or cold.)

Weather Forecasting /Prompt # 4



When the weather changes we need different types of clothes.

In the summer, we need _____.

In the winter we need _____.

Weather Forecasting /Prompt # 4



When the weather changes we need different types of clothes.

In the summer, we need _____.

In the winter we need _____.

Weather Forecasting /Prompt # 4



When the weather changes we need different types of clothes.

In the summer, we need _____.

In the winter we need _____.

Weather Forecasting/Prompt # 4



When the weather changes we need different types of clothes.

In the summer, we need _____.

In the winter we need _____.

Title of book/Prompt # 5



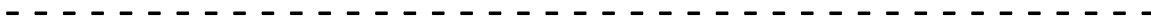
Compare your weather predictions from Monday to the actual weather for the week. Were your predictions correct? Make a chart/graph comparing the two.



Title of book/Prompt # 5



Compare your weather predictions from Monday to the actual weather for the week. Were your predictions correct? Make a chart/graph comparing the two.



Title of book/Prompt # 5



Compare your weather predictions from Monday to the actual weather for the week. Were your predictions correct? Make a chart/graph comparing the two.



Title of book/Prompt # 5




Compare your weather predictions from Monday to the actual weather for the week. Were your predictions correct? Make a chart/graph comparing the two.



Weather Forecast

It's sunny. It's rainy. It's cloudy. It's windy. It's foggy.



Example Chart/Graph

Monday	Tuesday	Wednesday	Thursday	Friday